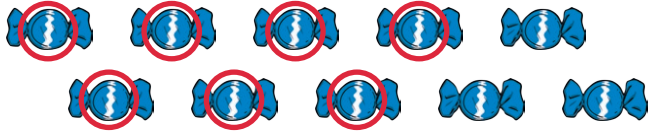


One More and One Less Groups up to 20


Can you find 1 more and 1 less?

Example:




I have 6 sweets. Show me 1 more. **1 more than 6 is 7.**

1.




I have 15 coins. Show me 1 less. _____

2.



I have 15 flowers. Show me 1 more. _____


3.



I have 11 cake. Show me 1 more. _____


One More and One Less Groups up to 20

4.




I have 19 sweets. Show me 1 less. _____

5.




I have 13 balls. Show me 1 less. _____

6.



I have 16 bees. Show me 1 less. _____

7.



I have 14 apples. Show me 1 more. _____

One More and One Less Groups up to 20

8.



I have 14 stars. Show me 1 less. _____

9.



I have 18 pairs of socks. Show me 1 less. _____

10.



I have 13 teddy bears. Show me 1 more. _____

One More and One Less Groups up to 20 - Answers

1.



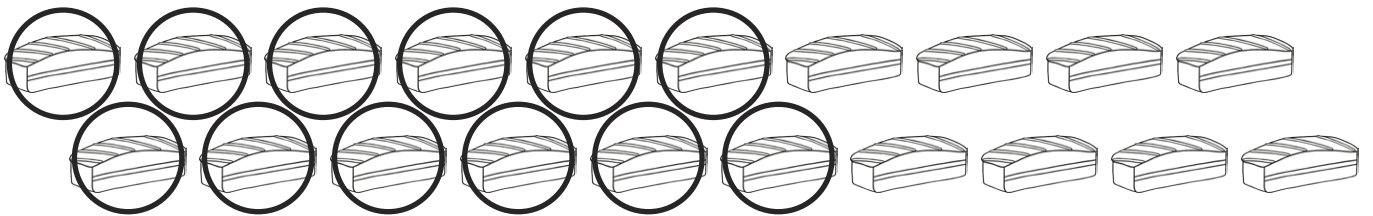
I have 15 coins. Show me 1 less. **1 less than 15 is 14.**

2.



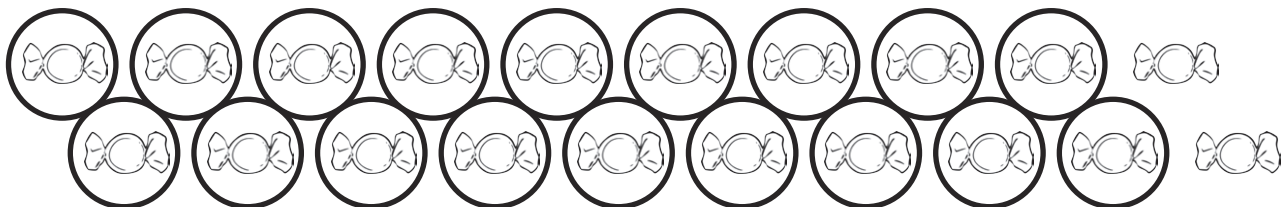
I have 15 flowers. Show me 1 more. **1 more than 15 is 16.**

3.



I have 11 cake. Show me 1 more. **1 more than 11 is 12.**


4.



I have 19 sweets. Show me 1 less. **1 less than 19 is 18.**

One More and One Less Groups up to 20 - Answers

5.



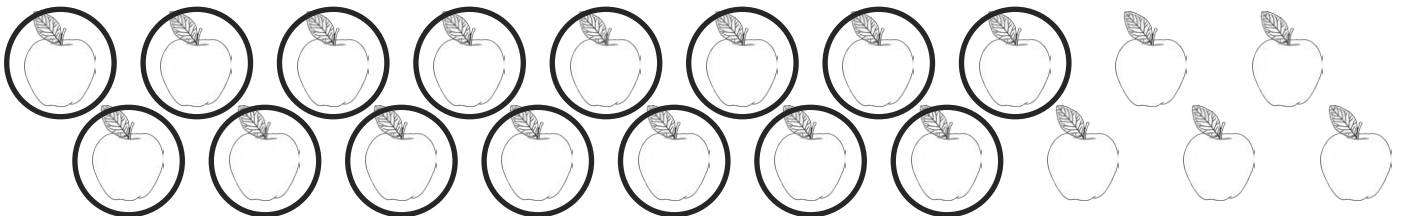
I have 13 balls. Show me 1 less. **1 less than 13 is 12.**

6.




I have 16 bees. Show me 1 less. **1 less than 16 is 15.**

7.



I have 14 apples. Show me 1 more. **1 more than 14 is 15.**

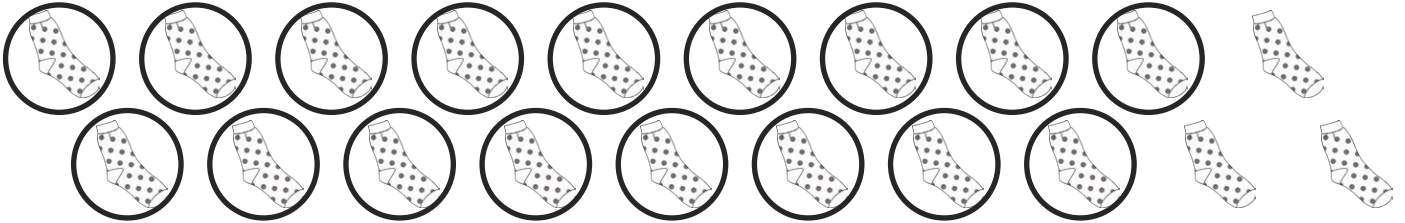
8.



I have 14 stars. Show me 1 less. **1 less than 14 is 13.**

One More and One Less Groups up to 20 - Answers

9.



I have 18 pairs of socks. Show me 1 less. **1 less than 18 is 17.**

10.



I have 13 teddy bears. Show me 1 more. **1 more than 13 is 14.**